

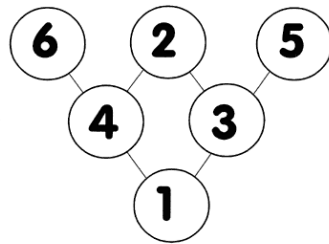
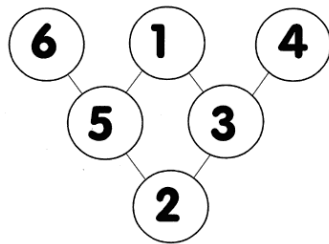
# Cambridge Home Learning

## Answer Sheet

### Notes: Differences

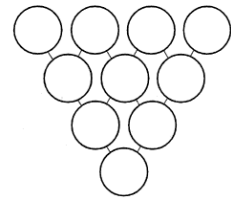
7 to 9

#### Solutions




#### Extension

Use each of the numbers 1 to 10.  
Put them in the circles.  
Each number must be the difference between the 2 numbers above it.



For example,



Find the difference between 2 small numbers  
Think logically