

Cambridge Home Learning







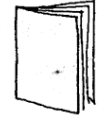


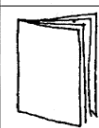





Name: _____

Toy shop

The ball, the doll and the book each cost a different amount.
Added together they give the totals shown.

What does each toy cost?

Which toy is missing?

			
		?	
			
			
£8	£20	£18	£20

From *Home Maths* Anita Straker © Cambridge University Press 1998

My answers and workings out.....