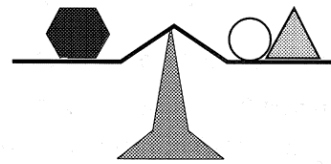
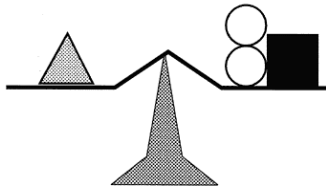
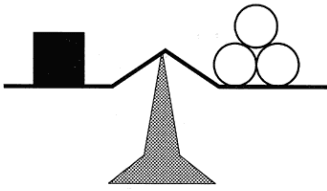


Cambridge Home Learning

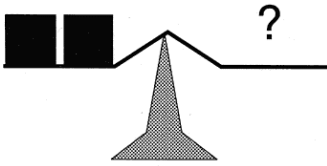
Name: _____

Weigh it up

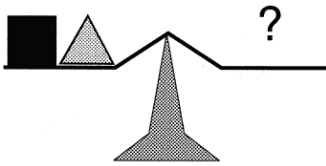
The scales will balance like this.



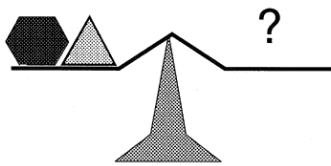
How many ○ will balance these?



1.



2.



3.

From *Home Maths* Anita Straker © Cambridge University Press 1998

My answers and workings out.....