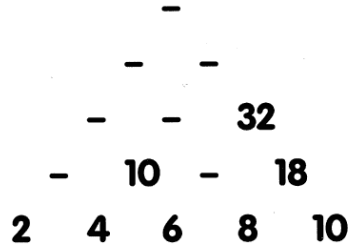


Cambridge Home Learning

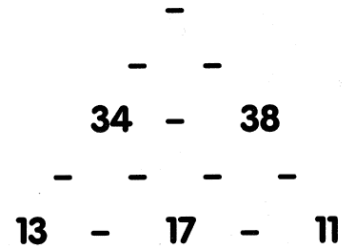
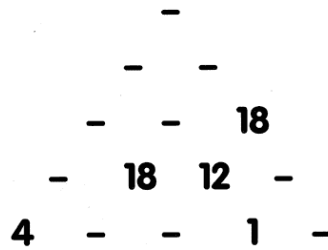
Name: _____

Number triangles

Each number in this triangle is the sum of the two numbers below it.
Copy and complete the triangle.



Now try these two.



From *Home Maths* Anita Straker © Cambridge University Press 1998

My answers and workings out.....